

Weekly Test 6- Mathematics

A. Match the numeral to the word name.

Numeral

Word Name


11
12
13
14
15

fifteen
thirteen
fourteen
twelve
eleven

B. Count the objects and select the correct number.




13 12 11




13 12 11




14 13 11



13 12 11



14 13 15



13 12 11

C. Solve the following word problems.
Type your number statements.

1. Jaelon had some pens.

Mummy gave him **9** pens. Then he had **15** pens in all.

How many pens did Jaelon have before mummy gave him any?

$$\underline{\hspace{2cm}} + 9 = 15$$



2. There are 11 apples on a tree. 3 apples fell off.

How many apples are left?



3. Amelia has **5** oranges and Saydee has **7** bananas.

How many fruits they have **in all**?



D. Measure each object using the paper clips.



paper clips



paper clips



paper clips



paper clips