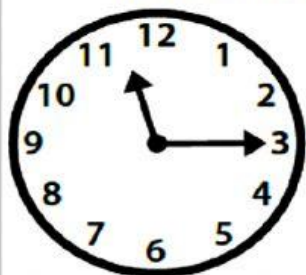


Name G.2/ No.

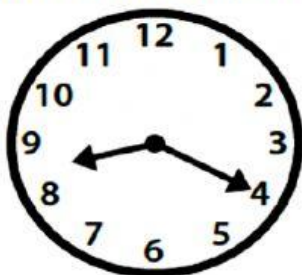
Telling Time with AM & PM Check-in

Look at each clock carefully and write the time below.

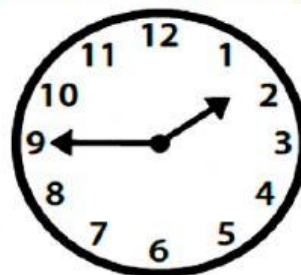
Then use the sun or moon to decide if the time is am or pm. The first one is done for you.



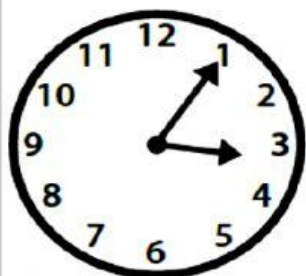
_____ : _____ am / pm



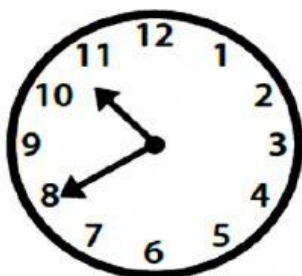
_____ : _____ am / pm



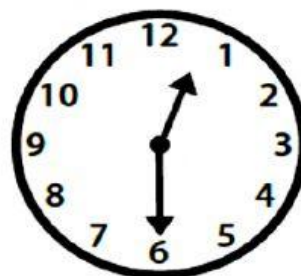
_____ : _____ am / pm



_____ : _____ am / pm



_____ : _____ am / pm



_____ : _____ am / pm