
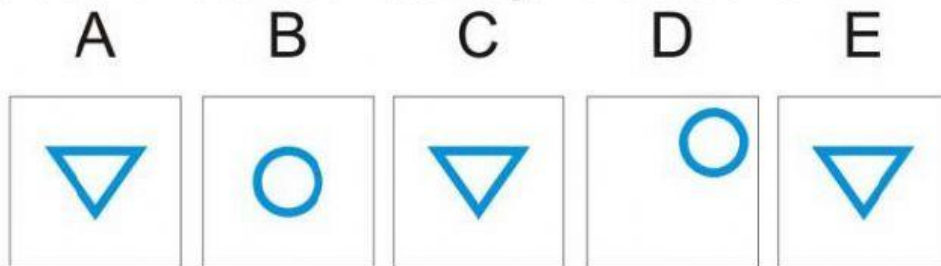


LESSON 11. MATH AND THINKING SKILLS


1. Which one of the five box below does not go with the other four?




2. Which one of the five box below does not go with the other four?



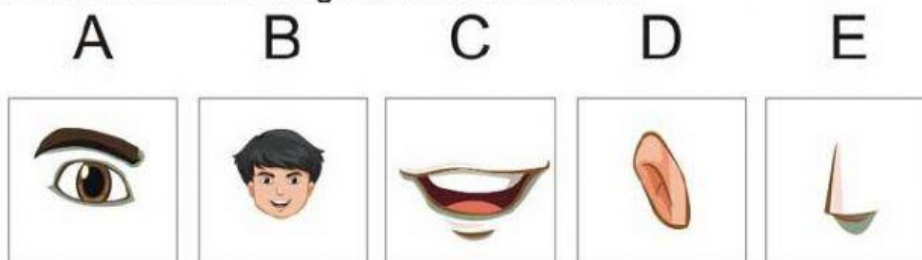
3. Which one of the five box below does not go with the other four?



4. Which one of these does not go with the other four?



5. Which one of these does not go with the other four?



6. Find The Missing Number?

1 3 5 7 ?

7. Find The Missing Number?

10, 8, 6, 4, ?

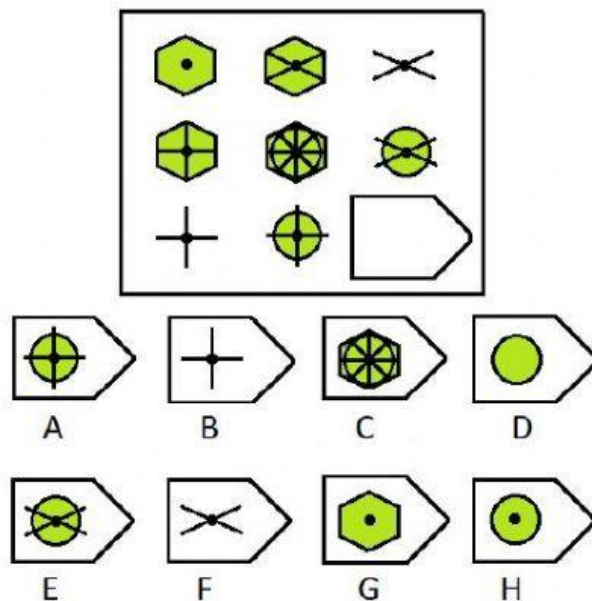
8. Find The Missing Number?

1, 3, 4, 2, 5, 7, 3, 7, ?

9. Which of the numbers should replace the question mark?

9	7	8	5	3
6	3	7	2	2
3	4	1	3	?

10. Find the missing shape?



11. How many of triangles in this shape?

