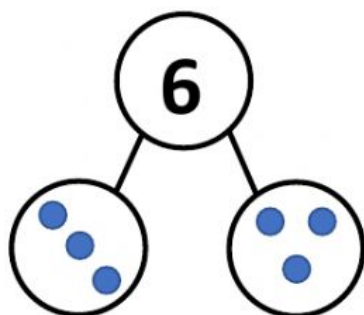
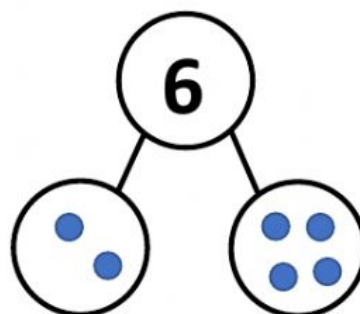


Name: \_\_\_\_\_

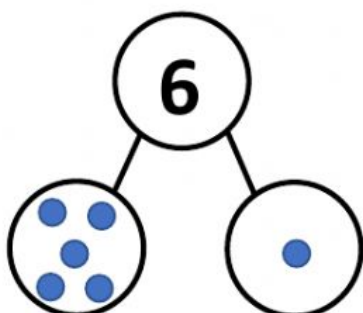
Put in the missing numbers to complete the number sentence for each number bond.



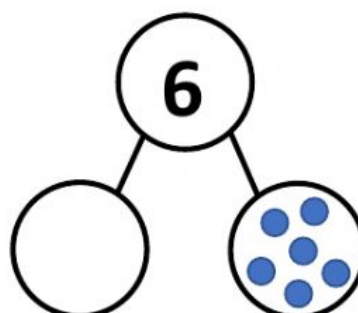
\_\_\_ + \_\_\_ make 6



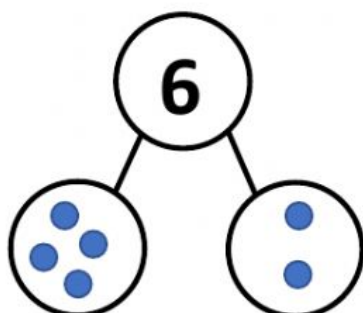
\_\_\_ + \_\_\_ make 6



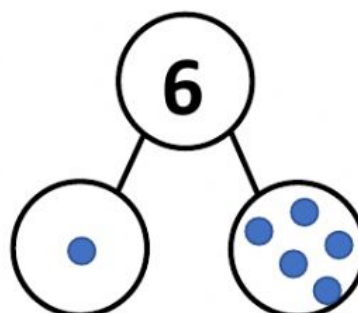
\_\_\_ + \_\_\_ make 6



\_\_\_ + \_\_\_ make 6



\_\_\_ + \_\_\_ make 6



\_\_\_ + \_\_\_ make 6