




Unit 7: Subtraction to 20

Revision of unit 7




- Do basic subtraction to 20
- Solve some basic word problems
- Use the structure
“(Number) minus (number) equals/is (number).”
“(Number) subtract (number) equals/is (number).”


1. Count and write the numbers.



9 minus 3 equals 6.



_____ minus _____ equals _____.



_____ minus _____ equals _____.

2. *There are 18 butterflies in the garden. Then 6 butterflies fly away. How many butterflies are left in the garden?*

_____ butterflies

3. Complete.

7	8	10	5
9	6	4	3

9 - 2

10 - ____

____ - 3

9 - ____

10 - ____

9 - ____

8 - ____

10 - ____

4. Match.

11

10 plus 6

16

19 subtract 8

15

18 minus 4

14

17 subtract 2