

Cambridge Primary Programme

Name: Class: Date:

TIME

Task 1: Match the digital clock and analog clock that shows the same time.

1)



a)



2)



b)



3)



c)



4)




d)



5)



















e)



Task 2: What time is it?


Write the time or draw the hands.

TIME

1. Sam and his sister watched a cartoon at twenty five past eight for 1 hour.

What time did the cartoon finish? _____



2. We went to the seaside. We set off at 11 o'clock, the journey took us 1 hour and 35 minutes.

What time did we get to the seaside? _____.



3. We did P.E class outside. We went out at 12:20 for 1 hour and 25 minutes.

What time did the P.E class finish? _____



4. We made a cake at ten past five. The cake was ready at quarter to seven.

How long did we make the cake? _____



5. My friend came around to play at half past eight. He went back home at quarter to one in the afternoon.

How long did he play? _____.



6. My mum and dad went swimming at twelve past ten for 50 minutes.



What time did they finish swimming? _____.