

SUMAS. Amigos del 10.


Haz estas sumas. Ayúdate de la de las barras.




$$10 = 5 + \underline{\quad}$$



$$10 = \underline{\quad} + \underline{\quad}$$




$$\underline{\quad} = \underline{\quad} + \underline{\quad}$$



$$\underline{\quad} = \underline{\quad} + \underline{\quad}$$

Suma ayudándote de la de las barras.




$$10 = \underline{\quad} + \underline{\quad}$$



$$10 = \underline{\quad} + \underline{\quad}$$



$$10 = \underline{\quad} + \underline{\quad}$$



$$10 = \underline{\quad} + \underline{\quad}$$

Completa para que sumando cada fila siempre salga 10.

10	
1	
	4
7	
	5
0	
	8

$$1 + \underline{\quad} = 10$$

$$\underline{\quad} + 4 = 10$$

$$7 + \underline{\quad} = 10$$

$$\underline{\quad} + 5 = 10$$

$$0 + \underline{\quad} = 10$$

$$\underline{\quad} + 8 = 10$$

1
2
3
4
5
6
7
8
9
10