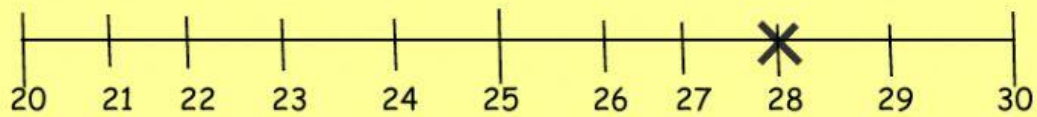
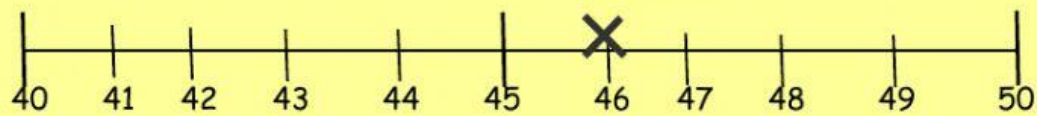


### Rounding Off To Nearest Tens

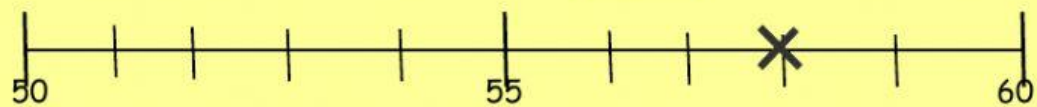
1) Round 28 to the nearest Tens =



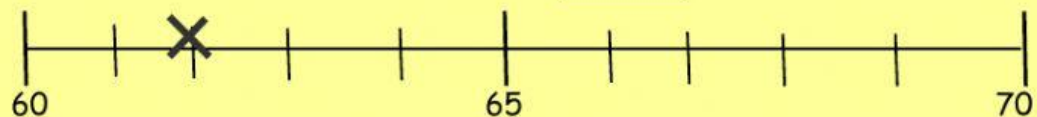
2) Round 46 to the nearest Tens =



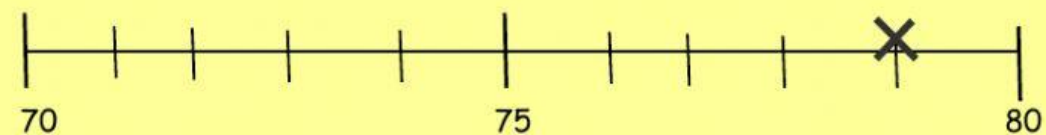
3) Round 58 to the nearest Tens =



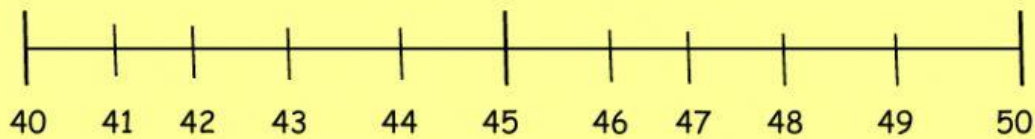
4) Round 62 to the nearest Tens =



5) Round 79 to the nearest Tens =



Let's try this! Use the number line to help you answer the question.



1) 46 is between 40 and 50.

It is nearer to \_\_\_\_\_ than to \_\_\_\_\_ .

46 is \_\_\_\_\_ when round off to the nearest tens.

2) 41 is between 40 and 50.

It is nearer to \_\_\_\_\_ than to \_\_\_\_\_ .

41 is \_\_\_\_\_ when round off to the nearest tens.