


THE SOLAR SYSTEM

PUT THE PLANETS IN ORDER



- | | | | |
|---------------------------------|---------------------------------|----------------------------------|----------------------------------|
| <input type="checkbox"/> Saturn | <input type="checkbox"/> Venus | <input type="checkbox"/> Mars | <input type="checkbox"/> Neptune |
| <input type="checkbox"/> Earth | <input type="checkbox"/> Uranus | <input type="checkbox"/> Jupiter | <input type="checkbox"/> Mercury |

CHOOSE THE CORRECT WORD

The Sun is a _____ .

All the planets move around the _____. This movement is called _____ .

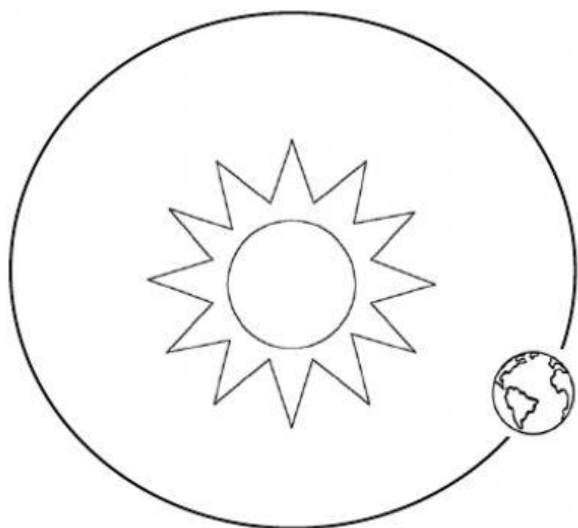
One Revolution of the Earth takes _____ .

The _____ is at the centre of the Solar System.

WRITE THE NAMES OF THE SEASONS




EARTH'S MOVEMENTS




IT TAKES

IT CAUSES



IT TAKES

IT CAUSES



COMPLETE THE SENTENCES. WRITE THE CORRECT WORD.

Sun Moon planet Earth

- a A satellite is an object which moves around a .
- b The is a satellite.
- c The Moon moves around the .
- d The lights up the Moon.

MATCH THE PHASES OF THE MOON

a b c d

first quarter new moon full moon third quarter