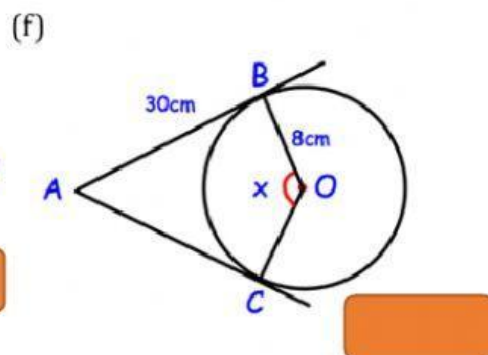
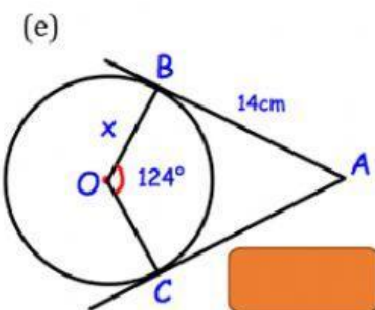
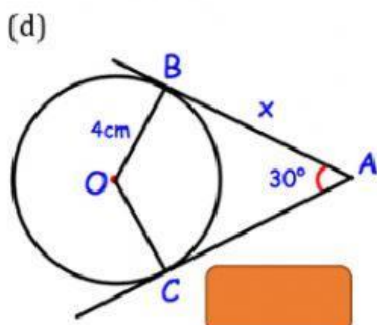
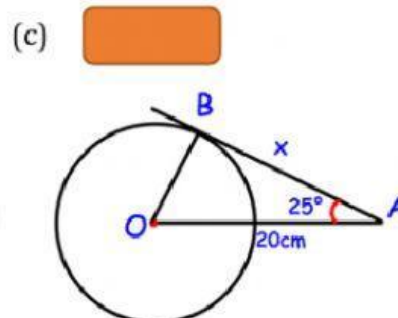
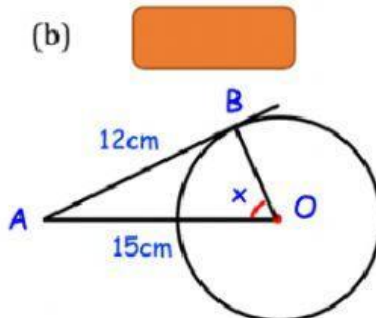
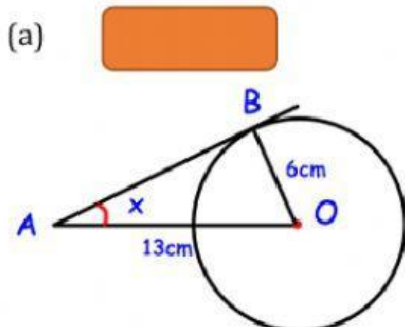


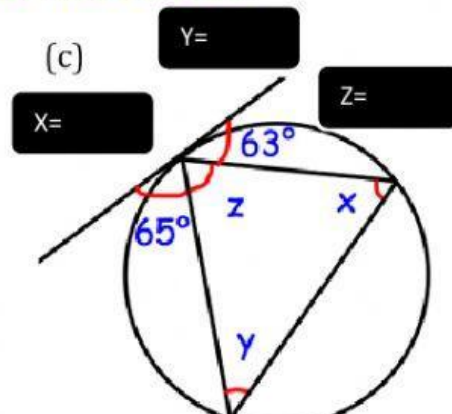
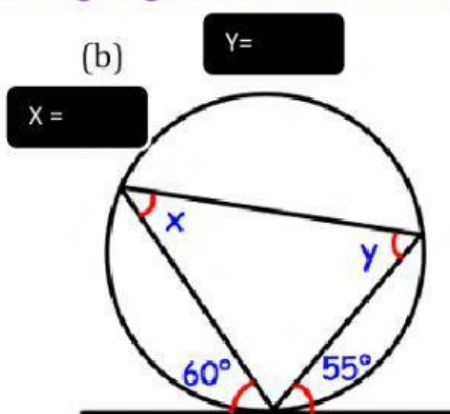
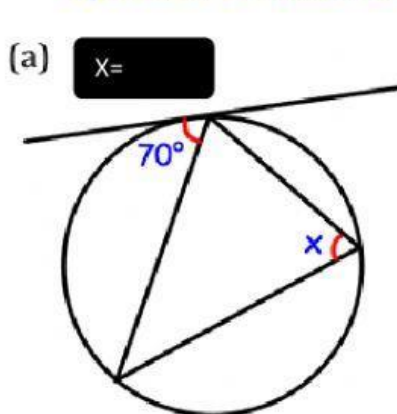
Name: _____ Nos: _____ Grade: _____ LESSON QUIZ 3

Circle Theorem - G9 Guidance: 1. Read each question carefully before you begin answering it. 2. Check your answers seem right from the table given and then drag it appropriately.

Question 1: Calculate the size of x in the circles below. The lines AB and AC are tangents.



Question 2: Find the missing angles labelled in each of these circles



52°	14.93 cm	27.47°	150.1°	18.12cm	70°
63°	53.13°	7.44cm	65°	60°	55°

Click on 'finished' below then 'check my answers' well then take photos of both your score and workings. Upload via class point or Line ID - gpower11. Thanks!!!

IG: amb_ojo_oluwole_godspower