



# UNIT 8: SHAPES

## Lesson 1:

### 2D shapes - Parallelogram and rhombus

#### Vocabulary

English words	Meaning
Flat shape	Hình phẳng
Parallelogram	Hình bình hành
Rhombus	Hình thoi

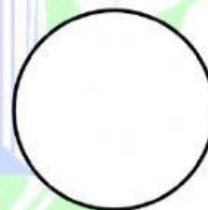
#### III. Practice

1. Ann drew some shapes on the board as shown below. Which of these shapes is a rhombus?

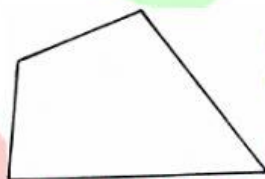
A.



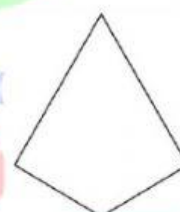
B.



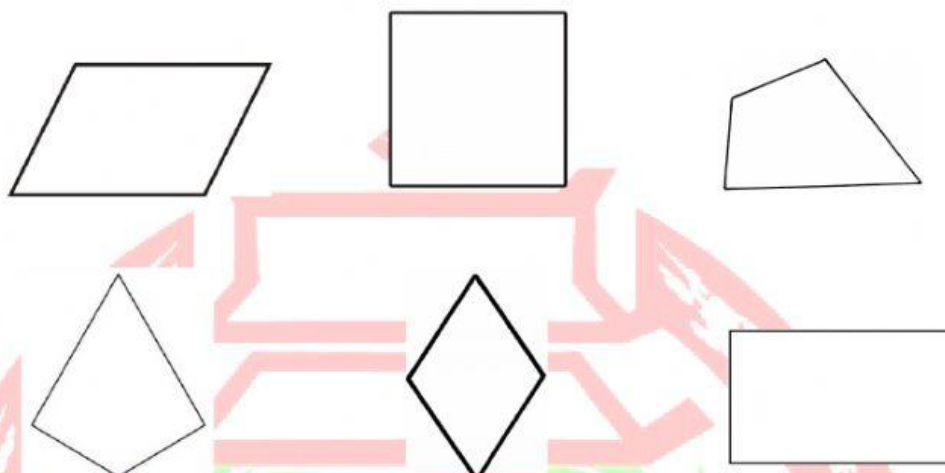
C.



D.




2. Which of the following shapes are parallelogram? Choose **ALL** of them.



3. How many parallelogram in the following shapes?

There are \_\_\_\_\_ parallelograms.



LE QUY DON