

Name: _____


Date: _____

Grade: _____

Math

Criterion Test

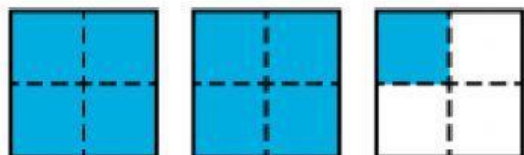
Score: ____/14 = ____%



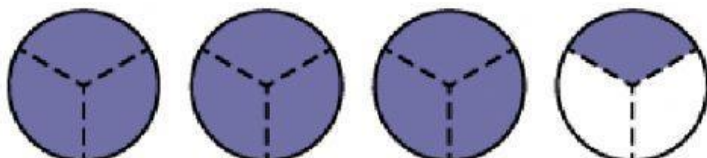
Mixed Numbers

Write a mixed number to show what part of each illustration is shaded.

a.



b.



Write each mixed number as an improper fraction

a. $2 \frac{1}{4} =$

b. $8 \frac{3}{8} =$

c. $2 \frac{5}{6} =$

Write each improper fraction as a mixed number.

m. $\frac{7}{5} =$

n. $\frac{9}{4} =$

o. $\frac{5}{3} =$