

Name: \_\_\_\_\_ Student's No.: \_\_\_\_\_ Level/Class: **P5/1**

**TOPIC: Quadrilaterals**



I. Name each shape. Fill in the blanks with the correct answers.

1)



\_\_\_\_\_

4)



\_\_\_\_\_

2)



\_\_\_\_\_

5)



\_\_\_\_\_

3)



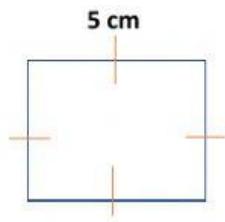
\_\_\_\_\_

6)

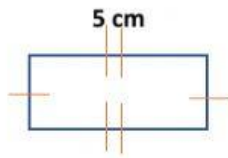


\_\_\_\_\_

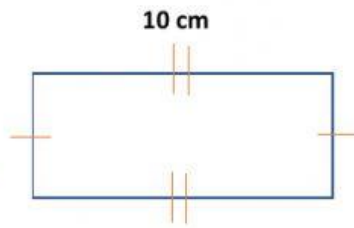
II. Fill in the blanks with the correct letters.



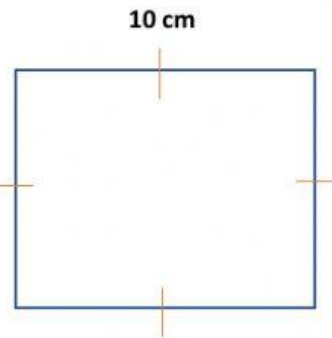
A



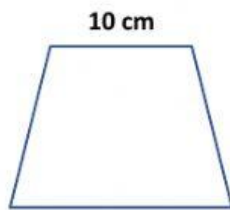
B



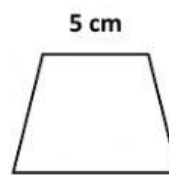
C



D



E



F

7) A quadrilateral with sides of 10 centimetres each. \_\_\_\_\_

8) A quadrilateral with a length of 10 centimetres and a width is half of the length. \_\_\_\_\_

9) A quadrilateral with sides of 5 centimetres each. \_\_\_\_\_

10) A quadrilateral has a length of 5 centimetres and a width is half of the length. \_\_\_\_\_