

























Name: _____

Class: 2A1

Pictogram

Days of Sunshine Pictogram

 = 2 days

October	   
November	  
December	     
January	    
February	    

How many days of sunshine did each month have?

October	<input type="text"/>	January	<input type="text"/>
November	<input type="text"/>	February	<input type="text"/>
December	<input type="text"/>		

Which month had the **most** sunny days?

Which month had the **least** sunny days?