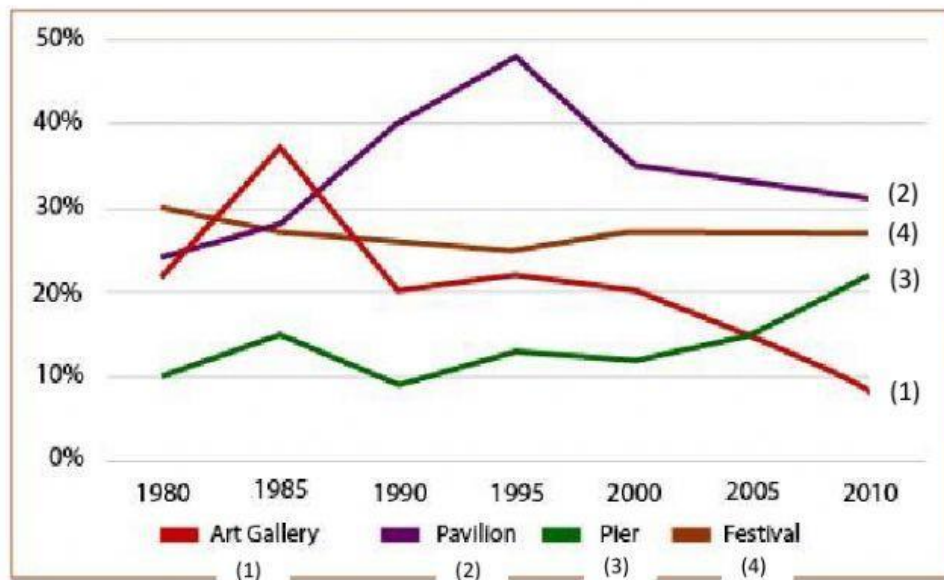


## WRITING

(30 minutes)

### Exercise 1. Fill in the blank with the given word

The line graph below shows the percentage of tourists to England who visited four different attractions in Brighton.



remained unchanged

least

a considerable increase

fluctuated

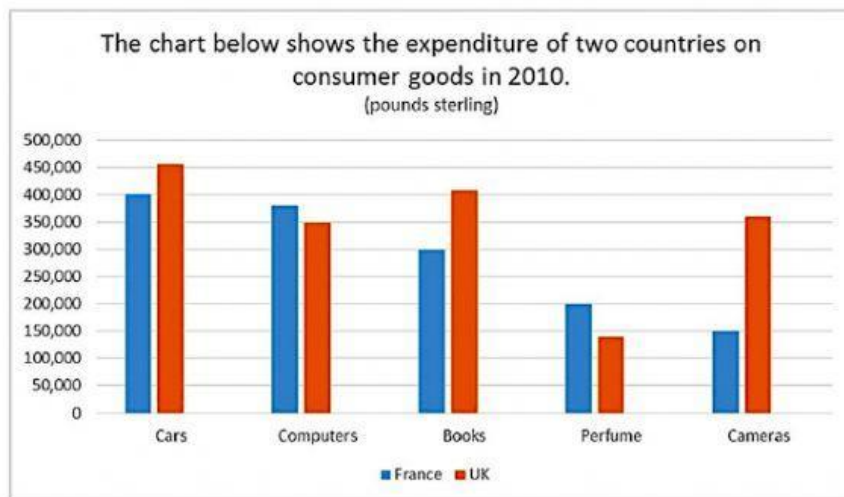
decreased sharply

The line graph shows the percentage of tourists to England who visited certain Brighton attractions between 1980 and 2010. We can see that in 1980 and in 2010 the favourite attractions were the pavilion and the festival. In 1980 the 1. .... popular attraction was the pier but in 2010 this changed and the art gallery was the least popular.

During the 1980s and 1990s, there was 2. .... in the number of visitors coming to the pavilion from 28% to 48% and then the percentage fell to 31% in 2010. The trend for the art gallery was similar to the pavilion. The number of visitors rose dramatically from 22% to 37% from 1980 to 1985 then 3. .... to less than 10% over the next twenty-five years. The number of tourists who visited the Brighton festival 4. .... slightly and then 5. .... at about 25%. The percentage of people visiting the

per also fluctuated from 1980 to 2000 then rose significantly from 12% to 22% between 2000 and 2010.

### ► Exercise 2. Make sentences based on the given words



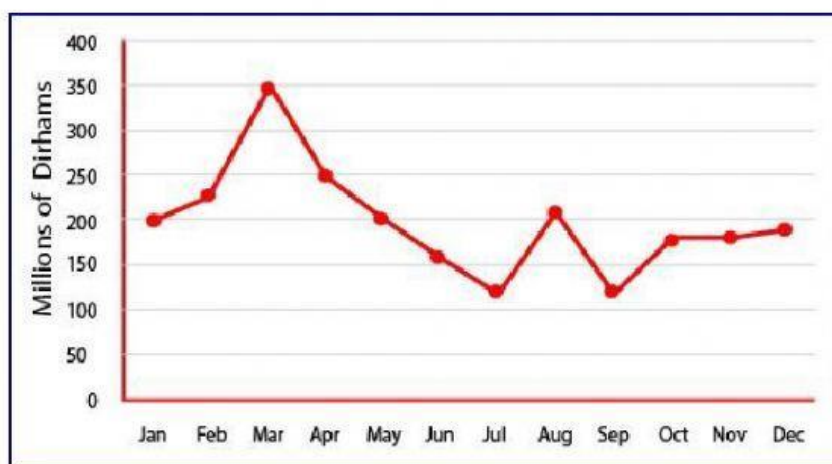
a. The UK / spent / more money / consumer goods / France / during / period.

b. Both the British and the French / spent / most / their money / cars.

c. The least amount / money / spent / perfume / UK.

### ► Exercise 3. Describe the graph by periods of time

The line graph shows estimated sales of gold in Dubai for 12 months in 2002 (in millions of Dirhams)



a. March – July

.....

b. July – October

.....

c. October – November

.....