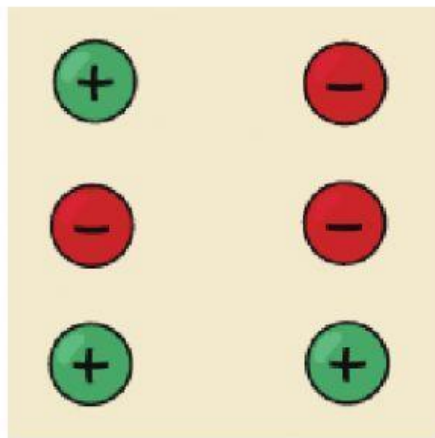


FINAL ACTIVITIES

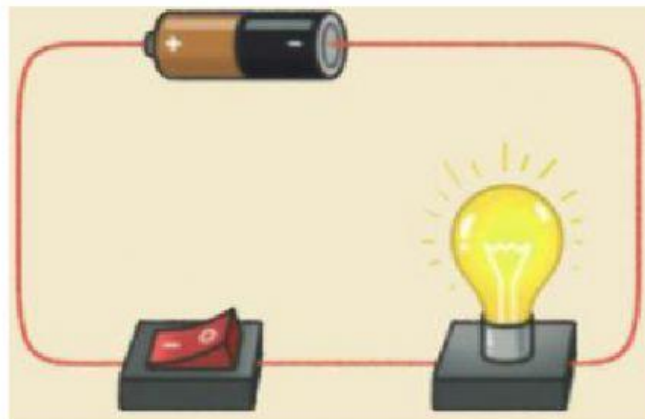
1. Complete the sentences.

- a. Objects with opposite charges _____, and objects with like charges _____.
- b. The movement of negative electric charges creates an _____.
- c. Electricity flows when a _____ is complete.
- d. Magnets attract objects made of _____ materials.
- e. Most plastics are electrical _____.

2. Attract or repel?



3. Label the components.

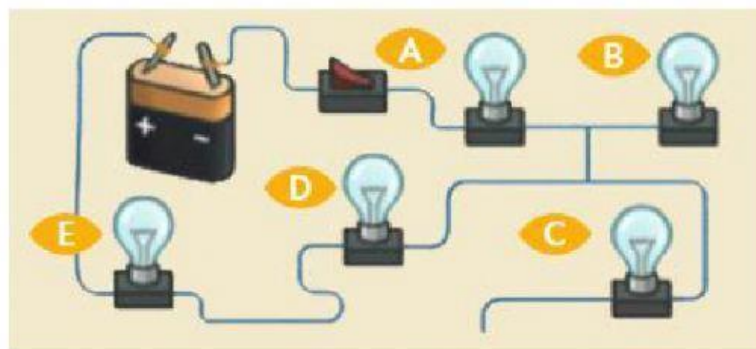


4. Classify the materials into electrical conductors and insulators.

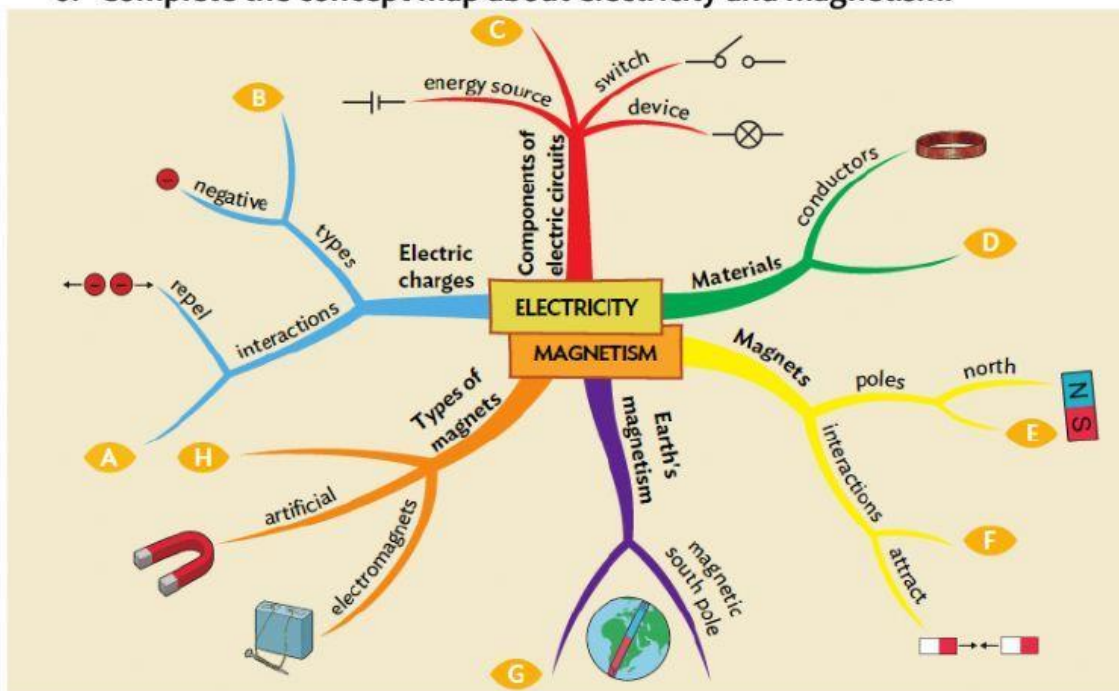
plastic gold copper
aluminium iron wood

CONDUCTOR	INSULATOR

5. Look at the circuit. Which light bulbs will light up when the switch is on?
YOU CAN CHOOSE MORE THAN ONE.



6. Complete the concept map about electricity and magnetism.



A.

B.

C.

D.

E.

F.

G.

H.