

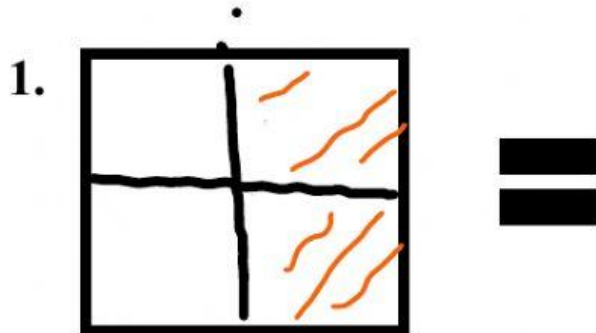


Mathematics

February 15, 2022

Quiz

Write the fraction of the shaded portion of each shape.



Write the fraction for the unshaded portion of the shapes above.

- 1.
- 2.
- 3.

Identify the Numerator for the following fractions.

Example: $1/2 = 1$ is the numerator

1. $3/4 =$ **is the numerator.**
2. $5/7 =$ **is the numerator.**
3. $9/10 =$ **is the numerator.**
4. $2/6 =$ **is the numerator.**
5. $8/16 =$ **is the numerator.**

Identify the Denominator for the following fractions.

Example: $1/2 = 2$ is the denominator.

1. $7/13 =$ **is the denominator.**
2. $2/8 =$ **is the denominator.**
3. $12/28 =$ **is the denominator.**
4. $15/30 =$ **is the denominator.**
5. $14/ 24 =$ **is the denominator.**