






## Mathematics Year 3

Solve the following problems. Fill in the blanks with the correct answer.

1	A hall is decorated with 2 863 balloons. 1 543 of them are green and the rest are yellow. Calculate the difference between green and yellow balloons.	
<div><div>2 863</div><div></div><div>1 543</div><div>=</div><div></div></div>		
2	Mr Lim bought 9 boxes of oranges. Each box contains 24 oranges. What is the total number of oranges Mr Lim has?	
<div><div></div><div>x</div><div>9</div><div>=</div><div></div></div>		
3	A town library has 570 story books and dictionaries. If the number of dictionaries is 250 less than story books, calculate the number of story books the library has.	
<div><div>570</div><div></div><div>250</div><div>=</div><div></div></div>		
4	Maya gave 49 sweets equally to 7 of her friends. How many sweets does each of her friends received?	
<div><div></div><div>÷</div><div>7</div><div>=</div><div></div></div>		
5	There are 530 boys and 542 girls in SK Sri Damai. Find the sum of pupils in SK Sri Damai.	
<div><div>530</div><div></div><div>542</div><div>=</div><div></div></div>		

Teacher Nadia