



Name: .....

Class: 3.....











Date: .....



Unit 6 - Why do we use numbers  
every day?

## GRAMMAR REVIEW

\*\*\*

### 1 Choose the correct answer

	1. Mark is eating.....pizza now. a. a loaf of                      b. a cup of                      c. a slice of
	2. My mom bought.....chocolate for me. a. a bar of                      b. a bottle of                      c. a bowl of
	3. Ann drank.....hot chocolate last night. a. a can of                      b. a cup of                      c. a bag of
	4. My father ate.....cake on his birthday. a. a piece of                      b. a pair of                      c. a packet of
	5. Suzy usually has.....cereal for breakfast. a. a glass of                      b. a box of                      c. a bowl of
6. Which clock shows " <i>half past one</i> "? <div style="display: flex; justify-content: space-around; align-items: center;"><div style="text-align: center;">a. </div><div style="text-align: center;">b. </div><div style="text-align: center;">c. </div></div>	
	7. <b>2:15</b> is..... a. half past two b. quarter after two c. quarter to three
	8. What's the time? a. It's quarter after three b. It's half past three c. It's quarter till four

	<p>9. The purple hand on the clock shows the .....</p> <p>a. hour                      b. second                      c. minute</p>
	<p>10. Choose the correct time</p> <p>a. eight o'clock              b. eight fifteen              c. eight thirty</p>

