





Lakukan pengurangan pecahan berpenyebut sama untuk soal-soal berikut.



Isilah jawaban pada tempat yang tersedia. Beri warna pada gambar sesuai dengan jawabanmu.

1.   =



-

2.   =

-

3.   =

-

4.   =

-

$$\frac{7}{7}$$

$$\frac{6}{7}$$

$$\frac{1}{7}$$

$$\frac{3}{3}$$

$$\frac{1}{3}$$

$$\frac{2}{3}$$

$$\frac{7}{9}$$

$$\frac{4}{9}$$

$$\frac{2}{9}$$

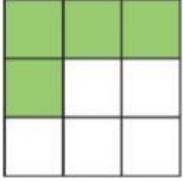

$$\frac{4}{11}$$

$$\frac{3}{11}$$

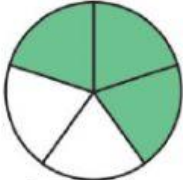

$$\frac{1}{11}$$

Kerjakanlah soal latihan berikut tentang pengurangan pecahan berpenyebut sama.



Tuliskan lambang bilangan pecahan lengkap dengan gambarnya.

1.   =

-

2.   =

-

3.   =

-

- $\frac{3}{5}$
- $\frac{2}{5}$
- $\frac{1}{5}$
- $\frac{2}{9}$
- $\frac{2}{9}$
- $\frac{4}{9}$
- $\frac{3}{16}$
- $\frac{4}{16}$
- $\frac{7}{16}$

4. Kerjakan soal berikut tanpa disertai gambar.

a.  $\frac{3}{7} - \frac{2}{7} =$

b.  $\frac{5}{6} - \frac{3}{6} =$

c.  $\frac{4}{5} - \frac{1}{5} =$

- $\frac{3}{5}$
- $\frac{2}{6}$
- $\frac{1}{7}$