

# COMPETENCIA-OPERRACIONES DE RESTA: HASTA 18

CLICK PARA INSTRUCCIONES

 Resta:

$15 - 8 = \square$

 Resta:

$16 - 8 = \square$

 Resta:

$11 - 8 = \square$

 Resta:

$13 - 8 = \square$

 Resta:


$11 - 2 = \square$

 Resta:

$10 - 8 = \square$

 Resta:


$12 - 8 = \square$

 Resta:

$15 - 7 = \square$

 Resta:

$10 - 5 = \square$

 Resta:


$11 - 5 = \square$

 Resta:

$11 - 6 = \square$

 Resta:

$17 - 8 = \square$

 Resta:

$10 - 9 = \square$

 Resta:

$13 - 5 = \square$

 Resta:

$12 - 3 = \square$

 Resta:

$13 - 7 = \square$

 Resta:

$12 - 4 = \square$

 Resta:

$12 - 6 = \square$

 Resta:

$11 - 3 = \square$

 Resta:

$12 - 9 = \square$

 Resta:

$11 - 5 = \square$

 Resta:

$16 - 7 = \square$

 Resta:

$18 - 9 = \square$

 Resta:

$15 - 9 = \square$

 Resta:

$14 - 7 = \square$

 Resta:

$14 - 9 = \square$

 Resta:

$16 - 9 = \square$

 Resta:

$11 - 9 = \square$

 Resta:


$13 - 4 = \square$

 Resta:

$11 - 5 = \square$

 Resta:

$13 - 7 = \square$

 Resta:

$17 - 8 = \square$

 Resta:

$13 - 6 = \square$

 Resta:

$10 - 8 = \square$

 Resta:

$12 - 7 = \square$

 Resta:

$15 - 6 = \square$

 Resta:

$13 - 9 = \square$

 Resta:

$11 - 7 = \square$

 Resta:

$12 - 9 = \square$

 Resta:

$16 - 8 = \square$

 Resta:

$11 - 2 = \square$

 Resta:

$17 - 9 = \square$

 Resta:

$15 - 8 = \square$

 Resta:

$13 - 9 = \square$

 Resta:

$10 - 6 = \square$