

Name: _____ Student's No.: _____ Level/Class: P2/1

TOPIC: Comparing and arranging weights

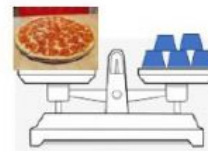


I. Fill in the blanks with the correct answers.
For items 1 – 3)



- 1) The lamp is _____ than the book.
- 2) An orange is _____ than the blueberries.
- 3) The weight of an apple is _____ than the weight of the pineapple.

For items 4 – 7)




- 4) The weight of _____ is heavier than the weight of bag.
- 5) Which one is the lightest? _____
- 6) Which one is the heaviest? _____
- 7) Arrange the weights **from the lightest to the heaviest**.

_____, _____, _____

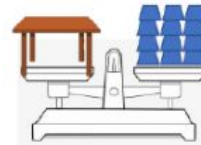
For items 8 – 10)



ball



hamburger



table

8) Which one is less than 4 units but more than 2 units? _____

9) Which one is more than 3 units but less than 15 units? _____

10) Arrange the weights **from the heaviest to the lightest**.
