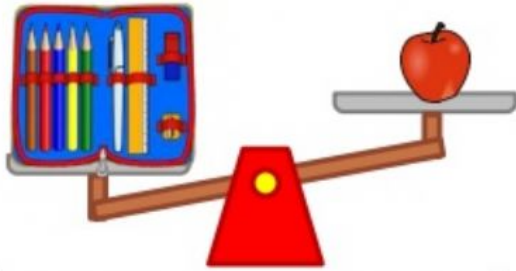



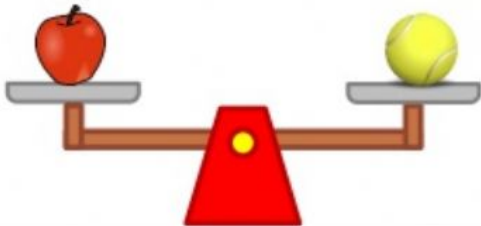
Look at the following scales and fill in the blanks with "heavier than", "lighter than" or "the same as".



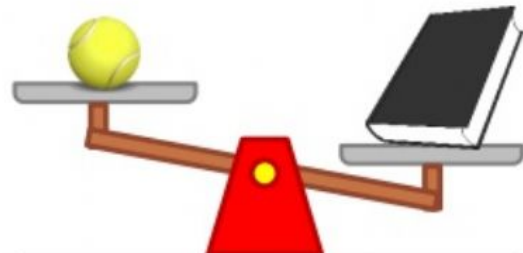
The pencil case weighs _____ the apple.




The pitcher weighs _____ the lamp.



The tennis ball weighs _____ the apple.



The tennis ball weighs _____ the book.



The lamp weighs _____ the book.



The pencil case weighs _____ the book.

Which one is heavier: pitcher or pencil case?

Which one is lighter: book or apple?

_____ 