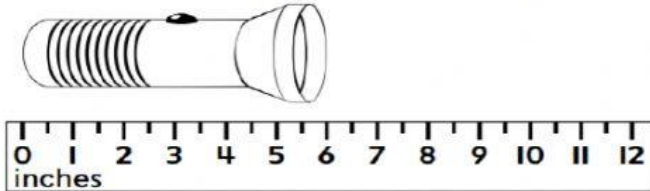


BANIYAS CITY C1, ABUDHABI

GRADE:2 MATHS

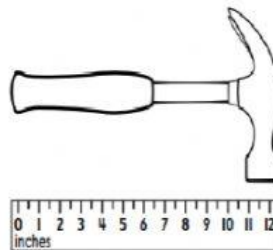
TOPIC:MEASUREMENT REVIEW

1. What is the length of the flashlight?

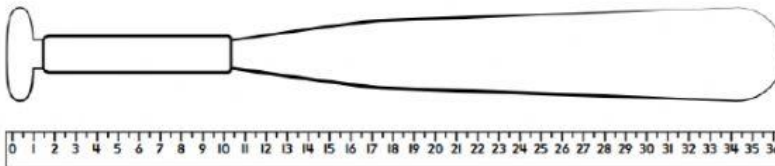


- A. 4 inches B. 5 inches**
C. 6 inches D. 7 inches

2 What is the length of the hammer?



3 What is the length of the bat?



Which is the best tool to use for the measurement?
Circle your answer.

4 length of a cell phone

- A. ruler B. yardstick C. tape measure**

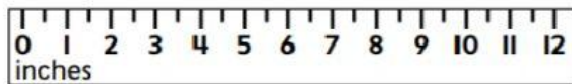

5 length of a football field

- A. ruler B. yardstick C. tape measure**

- 6 How can you compare the lengths? Fill in the equation.
Abby's hair is 15 inches long. Val's hair is 8 inches long.

$$\underline{\hspace{1cm}} - \underline{\hspace{1cm}} = \underline{\hspace{1cm}}$$

- 7 Which butterfly is longer? Fill in the equation.



$$\underline{\hspace{1cm}} - \underline{\hspace{1cm}} = \underline{\hspace{1cm}}$$

The top butterfly is inches longer than the bottom butterfly.

- 8 Vera used 13 yards of yellow yarn and 6 yards of blue yarn to knit a scarf. How can you compare the lengths of the yellow and blue yarn? Fill in the equation.

$$\underline{\hspace{1cm}} - \underline{\hspace{1cm}} = \underline{\hspace{1cm}}$$


- 9 How long is the shoe? Estimate the length.



- 10 How long is the jump rope? Estimate the length.



- 11 What is the length of the object in centimeters?
Use a centimeter ruler to measure.





- 12 How can you compare the lengths? Fill in the equation.

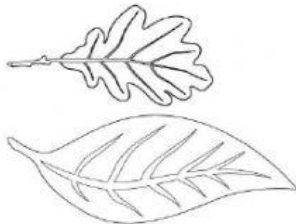
1. Kai's pencil box is 22 centimeters long. His pencil is 16 centimeters long.

_____ - _____ = _____

2. The classroom is 12 meters long. The gymnasium is 35 meters long.

_____ - _____ = _____

- 13 How much longer is the bottom leaf than the top leaf?



- 14 The length of a dump truck is 7 meters. A grader is 15 meters long. How much shorter is the dump truck than the grader?
- 15 Emily's pink hair ribbon is 43 centimeters long. Her red hair ribbon is 27 centimeters long. How much longer is the pink hair ribbon than the red hair ribbon? Explain your thinking.