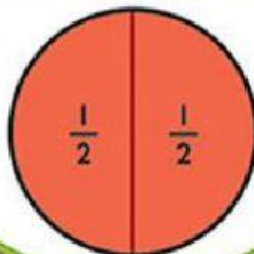

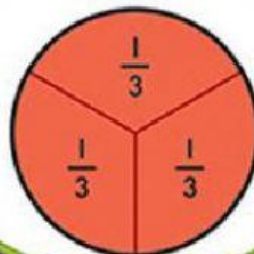
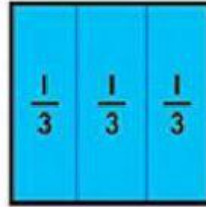


Fractional Parts

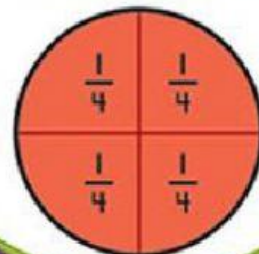
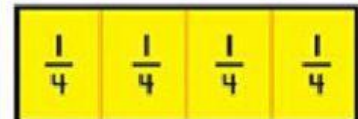
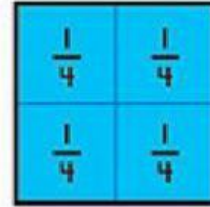
Halves



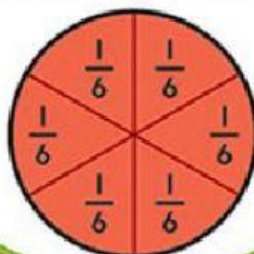
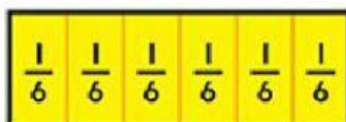
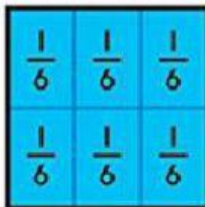
Thirds



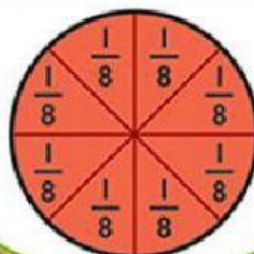
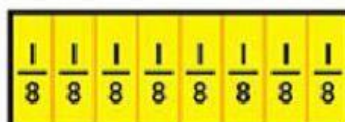
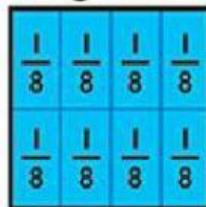
Fourths



Sixths



Eighths



Twelfths



©2001 TREND enterprises, Inc.

Look at the diagrams above and complete the following

1. How many halves=1 whole?

2. There are thirds in 1 whole.

3. 1 whole has quarters.

4. 1 whole has eighths.

5. There are sixths in 1 whole.

6. twelfths= 1 whole