

Name: _____ Class: _____ Date: _____

1. Read the calendar to answer the following questions:

/4

DECEMBER 2021						
Sunday	Monday	Tuesday	Wednesday	Thursday	Friday	Saturday
28	29	30	1	2	3	4
5	6	7	8	9	10	11
12	13	14	15	16	17	18
19	20	21	22	23	24	25
26	27	28	29	30	31	1

A) How many days are there in December?

B) What is the last day of December?

C) What date is 5 Days before New Year's Eve?

D) Which dates in December fall on a Saturday?

2. Write the digital time:

/3

10 minutes to 3 o'clock

 :

10 minutes past 9

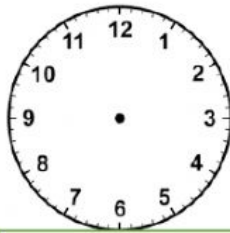
 :

Quarter past 5

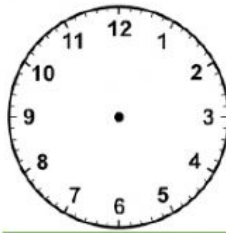
 :

3. Draw the hands on the clock faces.

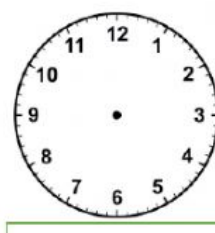
/3



10:30



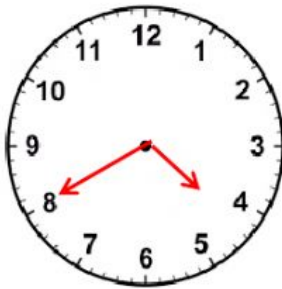
2:15



6:00

4. Write the digital time to match each analogue clock.

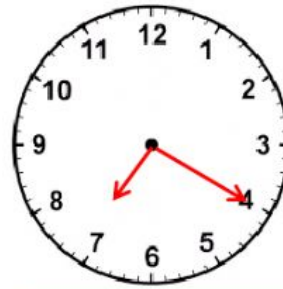
/3



:



:



:

5. What will be the time after 1 hour?

/2

- a) 3:45 = _____
- b) 12:00 = _____
- c) 4:30 = _____
- d) 1:15 = _____

6. Sara and Hala started dancing at 6:30 PM and ended at 8:00 PM. How long did they dance?

/2

7. Complete the table by calculating the time interval for each given time:

/3

	Start	End	Duration
1	10:30 PM	12:00 AM	
2	7:00 PM		2 hours
3	6:45 PM	9:00 PM	

.....END OF TEST.....