

Name: _____

Year 1 Bijak

Thursday

10th February 2022

Chapter 4 – Subtraction within 10

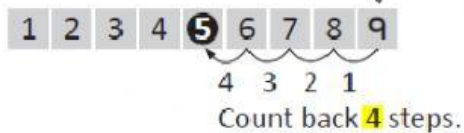
Topic: Subtracting by counting back

1.) Count back.

Fill in the blanks.

Example

$$9 - 4 = \underline{5}$$



(a) $10 - 1 = \underline{\quad}$

(b) $8 - 2 = \underline{\quad}$

(c) $7 - 3 = \underline{\quad}$

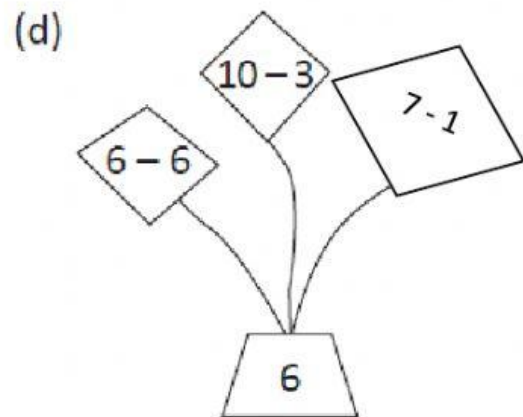
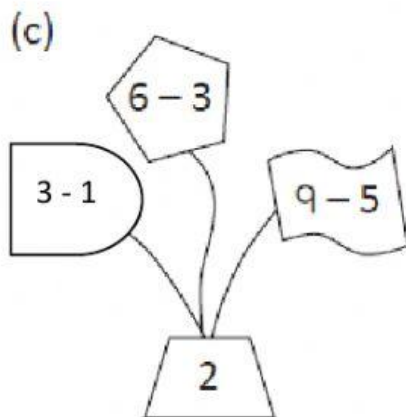
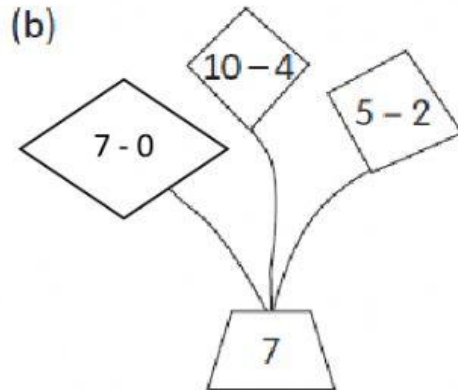
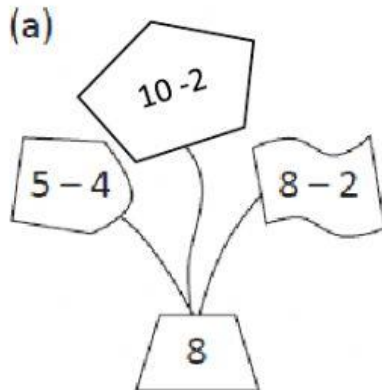
(d) $5 - 1 = \underline{\quad}$

(e) $8 - 3 = \underline{\quad}$

(f) $6 - 3 = \underline{\quad}$



2.) Choose the correct kite.



This work makes me feel:



Means you think
you did very well



Means you think
you did quite well



Means you think you
need to do better