















## What's the Weather Like?

JUNE						
Sunday	Monday	Tuesday	Wednesday	Thursday	Friday	Saturday
						
						
						

Study the calendar above and answer the questions that follow.

1. What month is being shown?

---

2. What was the weather like on Saturday 10th June?

---

3. For how many days was there rainy weather?

---

4. On what day was there stormy weather?

---

5. On Tuesday 13<sup>th</sup> June, the weather was partly sunny. Choose the symbol that represents partly sunny.

