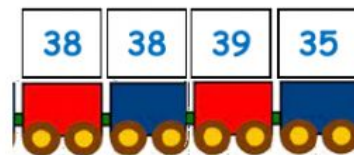

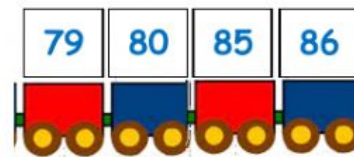
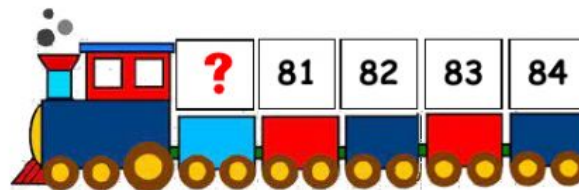
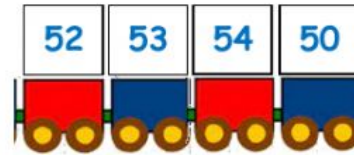
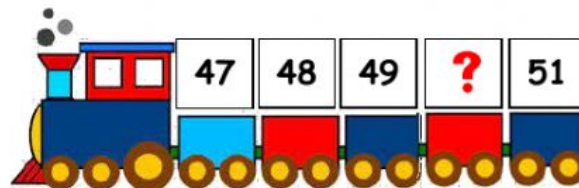
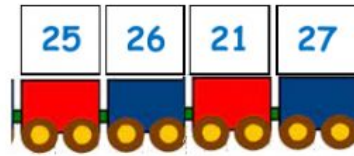
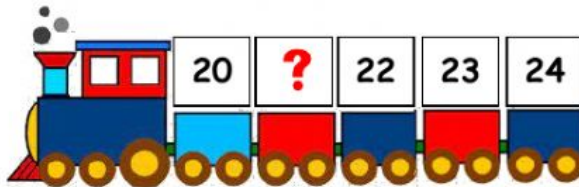
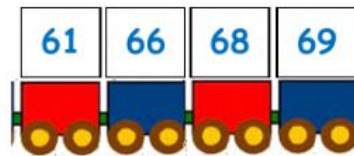
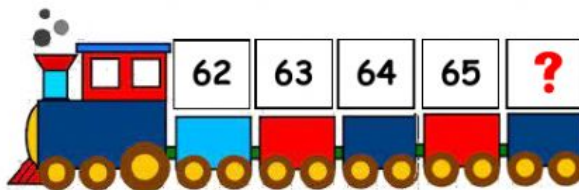


MATH-KINDER_Q2
MASTERY TEST
NUMBERS 1 TO 100

What is the missing number?
Click the correct number to count forward.



Which group was arranged from least to greatest?
Click the correct letter of your answer.

| | |
|---|--------------------|
| A | 41, 42, 43, 44, 45 |
|---|--------------------|

| | |
|---|------------------|
| B | 15, 2, 13, 4, 25 |
|---|------------------|

| | |
|---|--------------------|
| C | 55, 51, 49, 53, 50 |
|---|--------------------|

| | |
|---|-----------------|
| A | 8, 12, 3, 2, 10 |
|---|-----------------|

| | |
|---|--------------------|
| B | 40, 38, 36, 34, 32 |
|---|--------------------|

| | |
|---|--------------------|
| C | 78, 79, 80, 81, 82 |
|---|--------------------|

| | |
|---|---------------------|
| A | 100, 90, 80, 70, 60 |
|---|---------------------|

| | |
|---|------------------|
| B | 0, 1, 2, 3, 4, 5 |
|---|------------------|

| | |
|---|--------------------|
| C | 62, 60, 58, 59, 61 |
|---|--------------------|

| | |
|---|--------------------|
| A | 28, 29, 30, 31, 32 |
|---|--------------------|

| | |
|---|--------------------|
| B | 87, 85, 81, 83, 89 |
|---|--------------------|

| | |
|---|--------------------|
| C | 63, 66, 59, 50, 64 |
|---|--------------------|

| | |
|---|--------------------|
| A | 22, 23, 24, 25, 26 |
|---|--------------------|

| | |
|---|--------------------|
| B | 70, 82, 68, 75, 80 |
|---|--------------------|





| | |
|---|--------------------|
| C | 58, 51, 60, 67, 54 |
|---|--------------------|

| | |
|---|--------------------|
| A | 90, 96, 89, 84, 91 |
|---|--------------------|






| | |
|---|-------------------|
| B | 11, 21, 1, 91, 81 |
|---|-------------------|

| | |
|---|---------------|
| C | 5, 6, 7, 8, 9 |
|---|---------------|

What number comes after the flowers?
Click the bee that holds the correct one.



What is the number that comes between Mrs. Pepper and Mr. Salt? Click Blue's paw print that tells you the correct answer.



Which one is greater than ($>$), less than ($<$), or equal to ($=$)?

Click the correct symbol to compare the numbers.



56 70

$>$ $=$ $<$



33 33

$>$ $=$ $<$



28 26

$>$ $=$ $<$



98 89

$>$ $=$ $<$



45 14

$>$ $=$ $<$



100 100

$>$ $=$ $<$



41 41

$>$ $=$ $<$



19 91

$>$ $=$ $<$



80 66

$>$ $=$ $<$



2 20

$>$ $=$ $<$



99 66

$>$ $=$ $<$



12 8

$>$ $=$ $<$

Please click if the given is ODD or EVEN.



odd

even




odd

even



odd

even



odd

even



odd

even



odd

even



odd

even



odd

even

-END OF TEST-