










RELACIONES LÓGICO  
MATEMÁTICAS





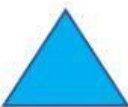
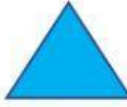
## PATRONES POR FORMA

OBSERVA CADA FILA Y COMPLETA EL PATRÓN DE FORMA. SELECCIONA EN FORMA ORDENADA (EMPEZANDO DESDE LA PRIMERA FIGURA DE LA IZQUIERDA ) CADA FIGURA.







								
---	---	--	--	--	--	--	--	--

						
---	---	---	---	---	--	---

								
---	---	---	--	--	--	--	--	--

					
---	---	---	---	--	---

								
---	---	---	--	--	--	--	--	--

					
---	---	---	---	--	---