

# Measuring Length

Write the correct length.



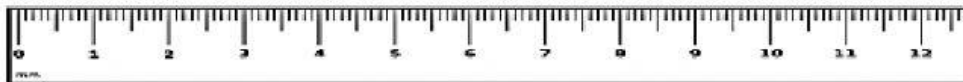
Caterpillar \_\_\_\_\_ cm



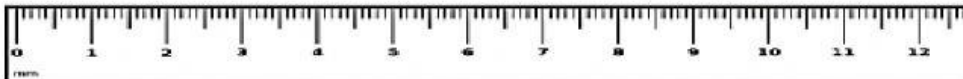
Toy car \_\_\_\_\_ cm



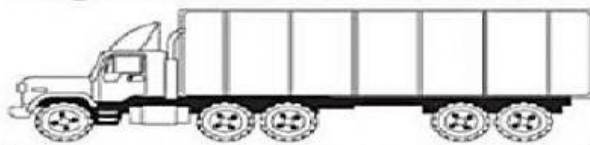
Water Bottle \_\_\_\_\_ cm



Soda \_\_\_\_\_ cm



1. What equation can you write to compare the lengths? Fill in the numbers.



13 meters

8 meters



\_\_\_\_\_ - \_\_\_\_\_ = \_\_\_\_\_

The boat is \_\_\_\_\_ meters \_\_\_\_\_ than the truck.