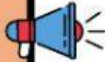


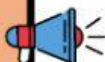

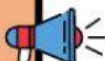
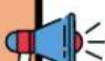





Name _____ Class M.2/____ No. _____

Subject: Social Studies

Topic: Listening Test Unit 3

LISTENING TEST

-  1. On this map, look out for the **fearless fisher either feathers** that are commonly found on a map.
-  2. A map shows where tourist **attractive attractions attracts attracting** are.
-  3. Maps show the shape and size of different places in **specific space special spacetime** area and where these places are located.
-  4. All of things surrounding you are part of your **envelop environmental environment environ.**
-  5. The **krathong khalong krung khlong** are used for the irrigation of the region's rice paddies.
-  6. This area has a wet **moonsoon monsoon monday manseng** climate.
-  7. This north arrow follows the **direct directive delectation direction** on a compass.
-  8. The **legend title scales north arrow contains** symbols and tells us what each symbol stands for.
-  9. Maps are **fast flat felt fatal** drawings.
-  10. The **Pasak Chao Phreak Chao Phraya Mekong** River runs through Bangkok, the capital city.