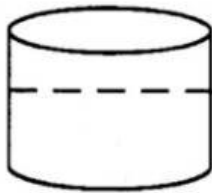


Name: _____

Mathematics

1. In a spelling test Mary scored 16 out of 25 correct. What percent did she get wrong? _____

2. A square sheet of paper has an area of 36cm^2 . What is the length in cm of one of its sides? _____ cm



3. The container below is 75% full. If it can hold 36L how many litres of water are needed to fill it? _____ litres

4. Multiply 1.2 by .004 _____

5. Sharon and Tiana shared candies between themselves. Every time Tiana gets 3 candies Sharon gets 2. How many candies does Sharon get if Tiana receives 18? _____

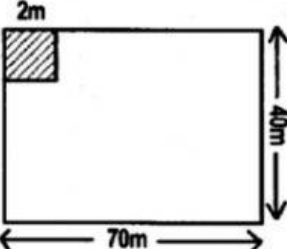
6. Mr. Morgan got a 25% discount when he purchased a television set for \$600.00. How much money did he save on his purchase?

\$ _____

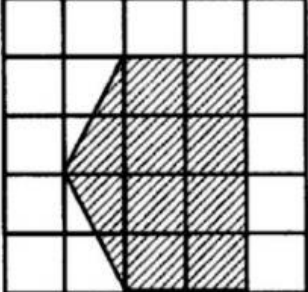
7. If 20% of a number is 15, what is the number?

8. A square has a length of 15cm. What is its perimeter?

_____ cm

9.  How many square tiles two metres in width are needed to cover the floor shown on the left?

The area of each square below is 2cm^2 . What is the area of the shaded squares in the diagram below?

10.  _____ cm^2