


Monthly Test January Mathematics

1. Put in the missing number in the series below

16 _____ 18

2. Which set has 18?



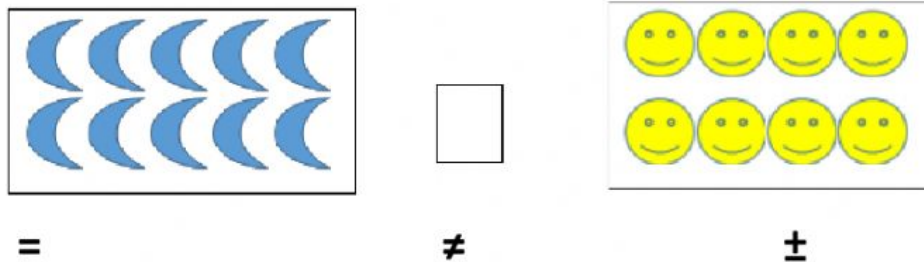
3. Select the correct spelling for the numeral name 16.

SIXTEEN

CIXTEEN

SIXTEN

4. Study the sets shown below. Choose the correct sign to fill the box.




5. Study the pair of numbers. Choose the correct sign to fill the box.

9 13

\geq \leq $=$

6. 2-D shapes are also called _____.



Flat Shapes

Solid Shapes

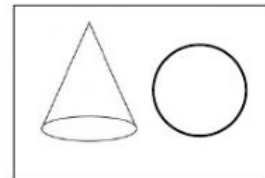
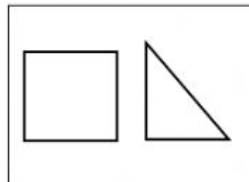
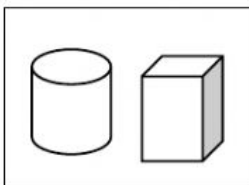
Square shapes

7. Which is a set of 3-D shapes?


A

B

C



8. What is the next shape in the pattern?



9. Which is the most suitable label for the pattern type?



ABC

AAB

ABB

10. What is the pattern core in the pattern below?

