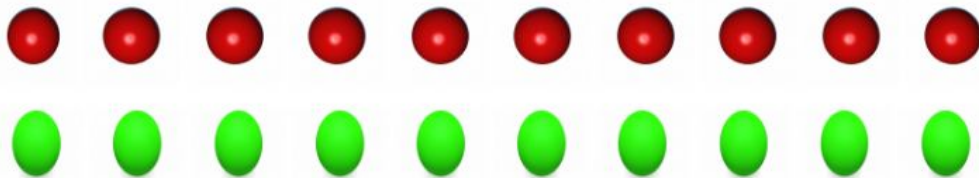


## Mathematics

### More than/Less than

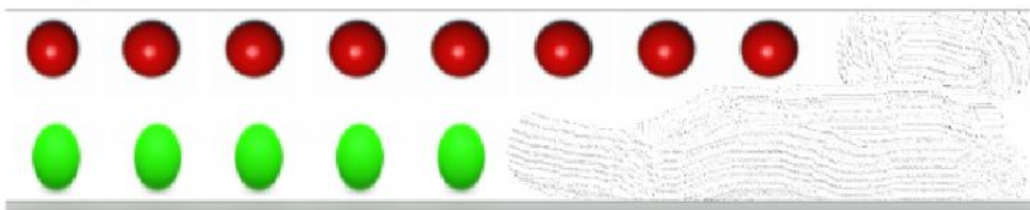


Drag the balls to show the number .

8 \_\_\_\_\_

5 \_\_\_\_\_

Match each ball one to one. Then,  
Complete the sentences.

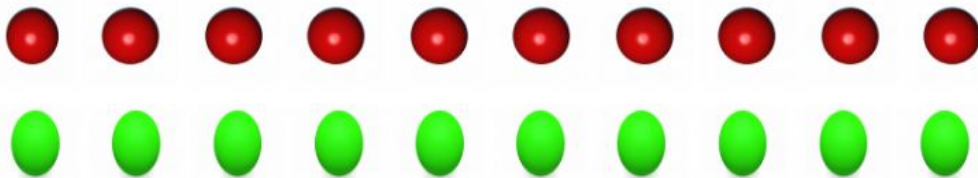


8 is \_\_\_\_\_ more than 5

1	2	3
---	---	---

## Mathematics

### More than/Less than



Drag the balls to show the number .

10 \_\_\_\_\_

4 \_\_\_\_\_

Match each ball one to one. Then,  
Complete the sentences.

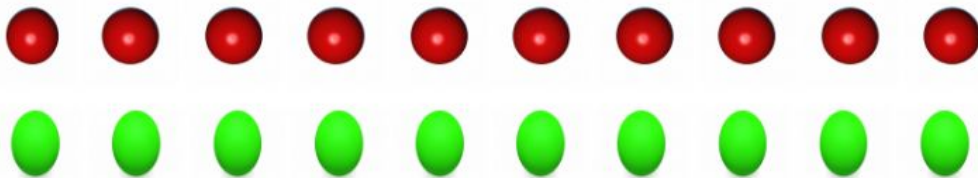


4	6	5
---	---	---

4 is \_\_\_\_\_ less than 10

## Mathematics

### More than/Less than




Drag the balls to show the number .

7 \_\_\_\_\_

3 \_\_\_\_\_

Match each ball one to one. Then,  
Complete the sentences.



7 is \_\_\_\_\_ more than 3

4	6	5
---	---	---