


Name: _____

Date: _____

Division

- 1 Draw rings around the items to form equal groups.



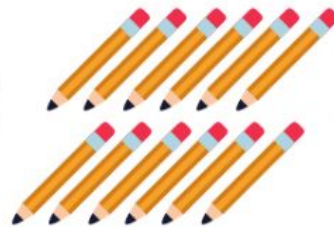
There are ____ groups of rockets.

- 2 Put 9 apples into basket of 3 each.
How many basket will there be?



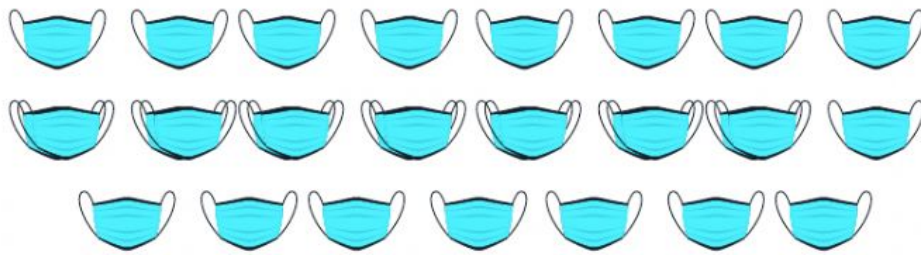
There will be ____ baskets.

- 3 Put 12 pencils into boxes.
Each boxes can hold 2 pencils.
How many boxes are needed?



____ boxes are needed.

- 4 Share 23 masks equally with 4 kids.



Each kid has ____ masks.

There are ____ masks left over.

- 5 The even numbers from 1 to 15 are

- 6 The greatest even number less than 15 is ____

- 7 The smallest odd number between 4 and 15 is ____

- 8 Put 10 kittens into groups of 2.
How many groups of kittens are there?



___ : ___ = ___

There are ____ groups of kittens.

- 9 Jack buys 27 marbles.
He puts them equally into 3 pockets.
How many marbles are there in each pockets?



___ : ___ = ___

There are ____ marbles in each pocket.

- 10 Namira has 30 litre of juice.
She fills each bottle with 10 litre of juice.
How many bottles does she need?

___ : ___ = ___

There are ____ bottles.

How do you do your worksheet?

(write A, B, or C)



A. I can do the worksheet
by myself



B. I need a little help



C. I need a lot of help