

NAME

DATE

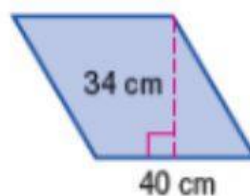
PERIOD

Find the area of each parallelogram.

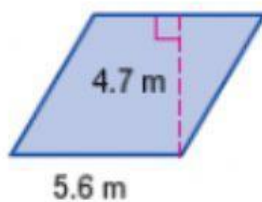
1.



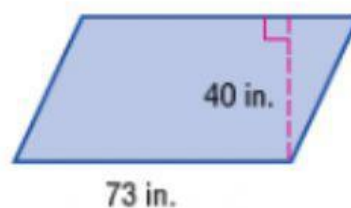
2.



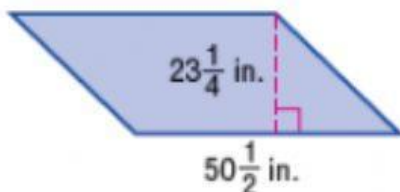
3.



4.



5.



6.



Find the missing measure of each parallelogram.

7. base, 7 m
area, 49 m^2

8. base, 20 ft
area, 120 ft^2

9. height, 3 mm
area, 13.5 mm^2

10. height, 5.6 yd
area, 13.44 yd^2