













## What time is it?

Name \_\_\_\_\_ Class M.1/\_\_\_\_ No. \_\_\_\_\_

- |                                 |  |
|---------------------------------|--|
| 1. It's eleven o'clock.         |  A. 6.15    |
| 2. It's a quarter past six.     |  B. 5.30    |
| 3. It's twenty to nine.         |  C. 11.00   |
| 4. It's half past five.         |  E. 6.00    |
| 5. It's ten past four.          |  F. 4.56   |
| 6. It's twenty-five past three. |  G. 8.40  |
| 7. It's six o'clock.            |  H. 12.10 |
| 8. It's four to five.           |  I. 5.45  |
| 9. It's ten past twelve.        |  J. 4.10  |
| 10. It's a quarter to six.      |  K. 3.25  |

