

Nickname: _____

Quiz – Second Semester



Match the shapes to their names.



Square



Rectangle



Rhombus




Trapezoid



Parallelogram



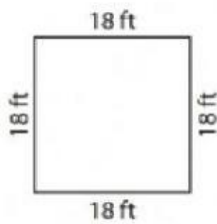
Kite



Perimeter of a Quadrilateral

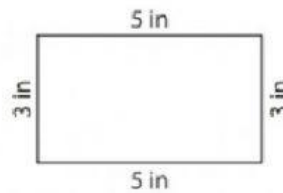
Find the perimeter of each quadrilateral.

1)



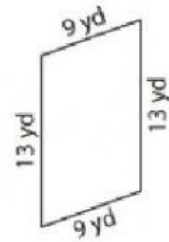
Perimeter = _____

2)



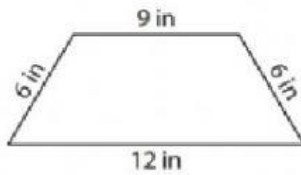
Perimeter = _____

3)



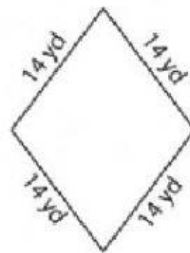
Perimeter = _____

4)



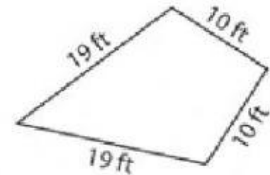
Perimeter = _____

5)



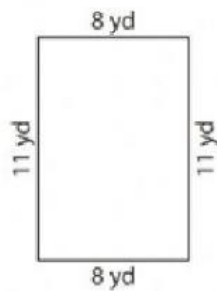
Perimeter = _____

6)



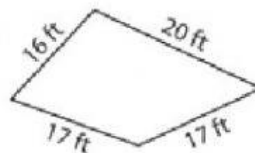
Perimeter = _____

7)



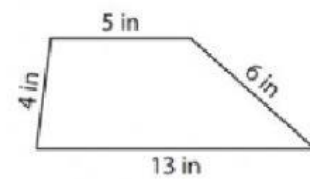
Perimeter = _____

8)



Perimeter = _____

9)

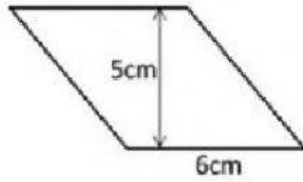


Perimeter = _____

Find the area of the quadrilateral.

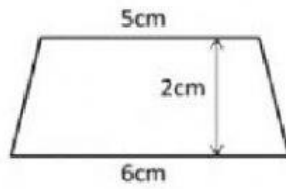
Name _____

1.



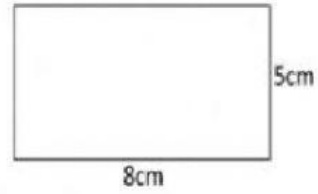
Area: _____ cm^2

2.



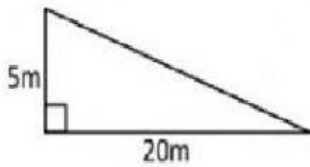
Area: _____ cm^2

3.



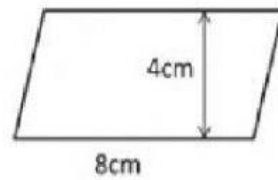
Area: _____ cm^2

4.



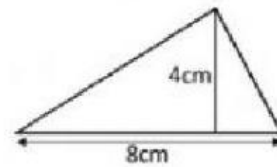
Area: _____ m^2

5.



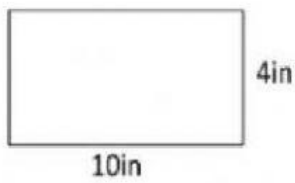
Area: _____ cm^2

6.



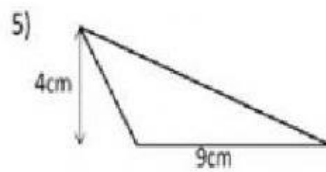
Area: _____ cm^2

7.



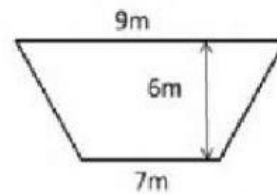
Area: _____ in^2

8.



Area: _____ cm^2

9.



Area: _____ m^2