

Division Problems

Solve the following questions and be sure to SHOW ALL WORKING.

1.) $316 \div 4 =$ _____


2.) $360 \div 8 =$ _____

3.) $415 \div 5 =$ _____


4.) $161 \div 7 =$ _____

5.) $135 \div 9 =$ _____


- 6.) Justin had 312 balloons. He puts them into 4 bags. He puts the same number of marbles in each bag. How many marbles are in each bag? _____ marbles



- 7.) Mrs. Baker the school librarian has 450 books to arrange in a bookshelf to prepare for school. If the bookshelf has 6 shelves and she puts the same number of books on each shelf, how many will she have on each shelf? _____ books



- 8.) Wes is having a picnic with his family. His mom prepares 100 cookies. There are 10 family members attending the picnic. If each person gets the same number of cookies, how many cookies does each person get? _____ cookies



- 9.) It's time to clean up Tyler's bedroom. Tyler has 57 toys out and 3 storage bins. If he puts the same number of toys in each bin. How many toys will be in each bin?
_____ toys



- 10.) Henry has 290 marbles in his marble collection. He wants to organize his marbles by colour. He has red, blue, green, yellow and purple marbles. If he organizes his marbles by colour and he has the same number of marbles in each bag, how many marbles will be in each bag?
_____ marbles

