

Name \_\_\_\_\_

## Inches, Feet, and Yards

Circle the best estimate.

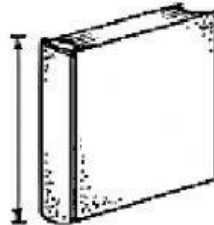


1. About how long is your math book?

about 1 inch

about 1 foot

about 1 yard

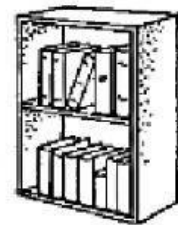


2. About how high is a bookshelf?

about 3 inches

about 3 feet

about 3 yards




3. About how long is a jump rope?

about 2 inches

about 2 feet

about 2 yards



4. About how long is a crayon?

about 3 inches

about 3 feet

about 3 yards



5. About how long is a car?

about 5 inches

about 5 feet

about 5 yards



6. About how long is a grasshopper?

about 2 inches

about 2 feet

about 2 yards




7. About how long is a football field?

about 100 inches

about 100 feet

about 100 yards

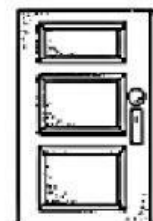


8. About how high is a door?

about 8 inches

about 8 feet

about 8 yards



**Notes for Home** Your child estimated the length of objects using inches, feet, and yards. *Home Activity:* Ask your child if the width of a door is about 3 inches, 3 feet, or 3 yards. (3 feet)