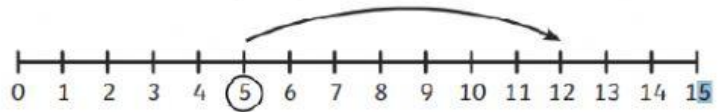


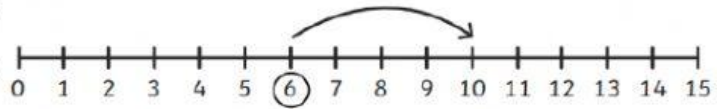
Addition to 20 on a Number Line - Sheet 2

For these questions, can you work out which sums are being shown on the number lines? The first one has been done for you.

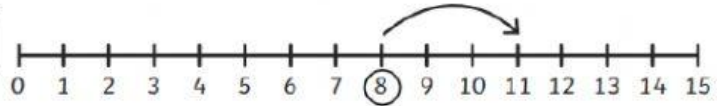
1. $5 + 7 = 12$



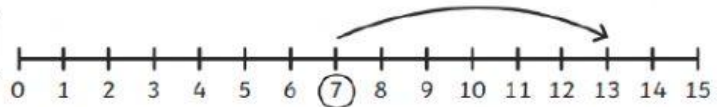
2. $\square + \square = \square$



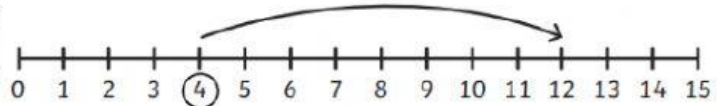
3. $\square + \square = \square$



4. $\square + \square = \square$



5. $\square + \square = \square$



6. $\square + \square = \square$

