

Name: \_\_\_\_\_ Student's No.: \_\_\_\_\_ Level/Class: P1/1

TOPIC: Weight



I. Multiple choice. Choose the letter of the appropriate measuring tool.

1) strawberries



a. *balance scale*

b. *platform scale*

c. *spring scale*

2) pineapples



a. *balance scale*

b. *platform scale*

c. *spring scale*

3) sister's weight



a. *balance scale*

b. *platform scale*

c. *spring scale*

4) eggplants



a. *balance scale*

b. *platform scale*

c. *spring scale*

5) gold earrings



a. *balance scale*

b. *platform scale*

c. *spring scale*

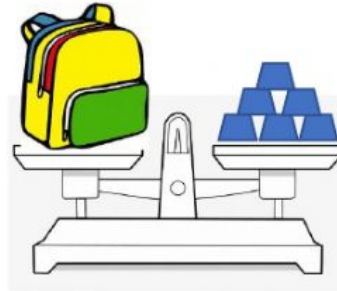
II. Fill in the blank with the correct answer.  = 1 unit

6)



The weight of the ball is \_\_\_\_\_ units.

7)



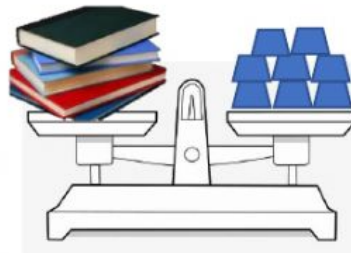
The weight of the bag is \_\_\_\_\_ units.

8)



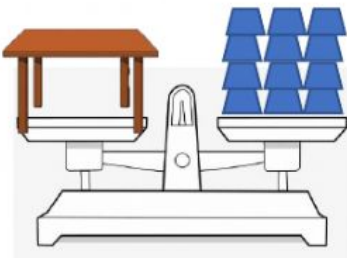
The weight of the burger is \_\_\_\_\_ units.

9)



The weight of the books is \_\_\_\_\_ units.

10)



The weight of the table is \_\_\_\_\_ units.