


1. **Une** la imagen con la suma que le representa.




$$10 + 4$$



$$10 + 7$$




$$10 + 1$$




$$10 + 0$$


2. **Une** la imagen con el número que la representa



12



16



10



19