




# Subtraction to 10.


Cross out the pictures to help you work out the answer to the subtraction questions. Write your answers in the box.




$4-2 = \square$



$5-2 = \square$



$2-1 = \square$



$9-5 = \square$



$8-3 = \square$



$10-4 = \square$

2

6

1

5

3

4