


Area and Perimeter of Rectangles and Squares

Instruction: Find the area and perimeter. Area = $L \times W$ and perimeter = $2L + 2W$.

7 mi




9 mi

P= mi

A= mi²

6 km




6 km

P= km

A= km²

8 ft




9 ft

P= ft

A= ft²

4 km




1 km

P= km

A= km²

2 m




8 m

P= m

A= m²

7 m



5 m

P= m

A= m²