

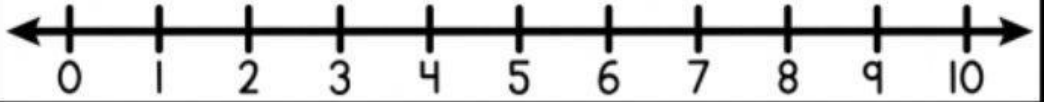
# Adding Using a Number Line

Name: \_\_\_\_\_

Directions: Use the number lines to solve the equations. Show your work on the number lines.

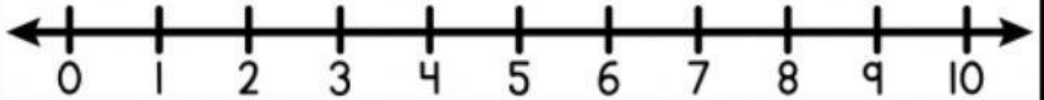
1.

$5+2=$



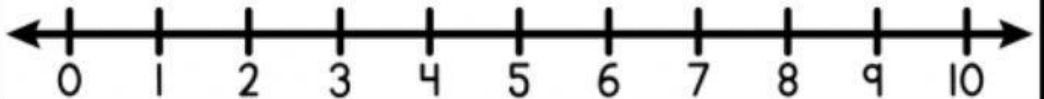
2.

$3+3=$



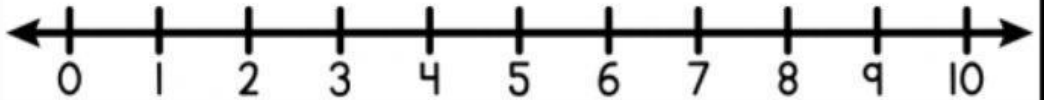
3.

$4+2=$



4.

$2+7=$



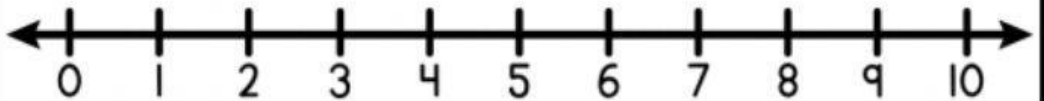
5.

$0+2=$



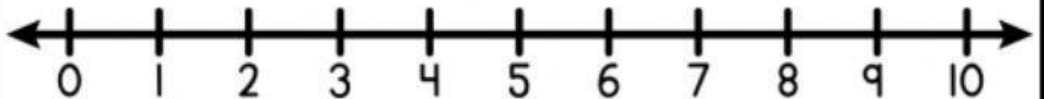
6.

$3+5=$



7.

$4+1=$



8.

$4+6=$

