






1. Resol les restes amb les joguines. Calcula.



 $5 - 3 = \square$



 $5 - 2 = \square$



 $4 - 1 = \square$



 $4 - 3 = \square$



 $5 - 4 = \square$



 $5 - 1 = \square$



 $6 - 4 = \square$


 $6 - 2 = \square$


 $5 - 5 = \square$


 $5 - 0 = \square$


 $6 - 5 = \square$


 $6 - 1 = \square$

2. Calcula.

$6 - 6 = \square$

$6 - 0 = \square$

$6 - 2 = \square$

$6 - 4 = \square$

$6 - 5 = \square$

$6 - 1 = \square$

$5 - 3 = \square$

$5 - 2 = \square$