


Task 1 Choose **half past** (hour) or (hour) **o'clock**?



1. half past/o'clock



2. half past/o'clock



3. half past/o'clock



4. half past/o'clock



5. half past/o'clock



6. half past/o'clock




7. half past/o'clock




8. half past/o'clock



9. half past/o'clock



10. half past/o'clock









11. half past/o'clock



12. half past/o'clock

Task 2 Fill in the time

1. 2. 3. 4. 5. 6. 7. 8. 9. 10. 11. 12.

Task 3 Match



half past three

9:30



one o'clock

5:30



half past nine

12:30



six o'clock

8:00



half past five

1:00



eight o'clock

6:00



half past twelve

3:30