




SUMAS. Con ayuda visual.

Haz estas sumas usando la tabla, para contar.

$3 + 2$

 $\blacktriangleright 3 + 2 = \underline{\quad}$

$4 + 4$

 $\blacktriangleright 4 + 4 = \underline{\quad}$

$6 + 2$

 $\blacktriangleright 6 + 2 = \underline{\quad}$

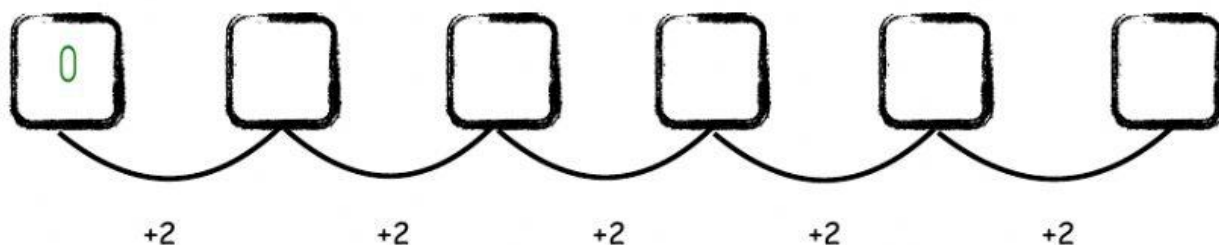
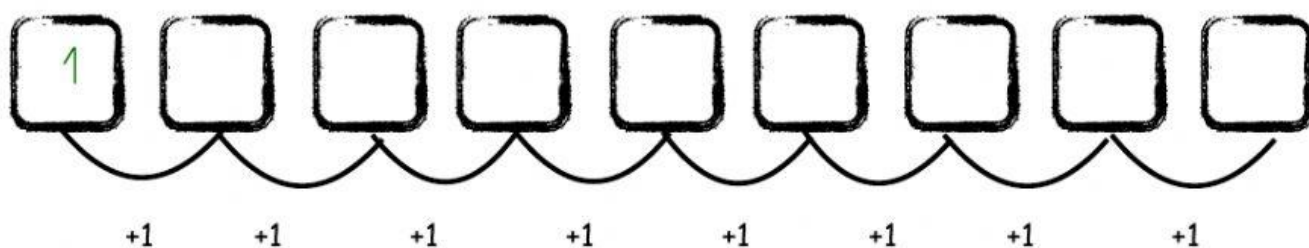
$7 + 2$

 $\blacktriangleright 7 + 2 = \underline{\quad}$

$4 + 3$

 $\blacktriangleright 4 + 3 = \underline{\quad}$

Completa las siguientes series.



Suma ahora sin ayuda.

$2 + 3 = \underline{\quad}$

$4 + 1 = \underline{\quad}$

$4 + 2 = \underline{\quad}$

$3 + 5 = \underline{\quad}$

$1 + 6 = \underline{\quad}$

$5 + 4 = \underline{\quad}$

$3 + 4 = \underline{\quad}$

$0 + 9 = \underline{\quad}$